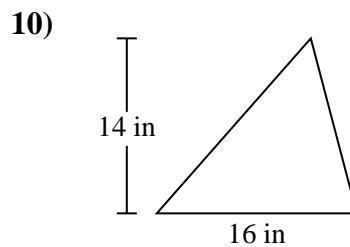
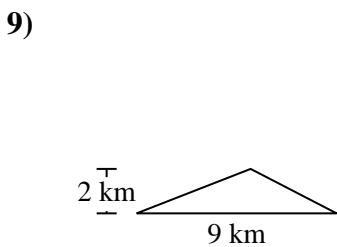
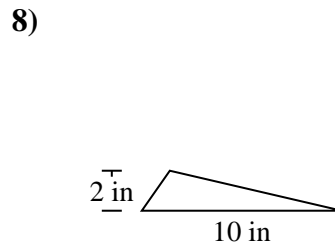
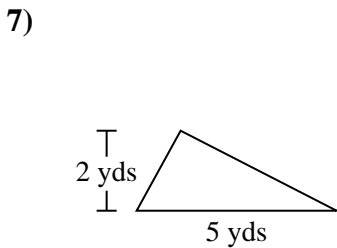
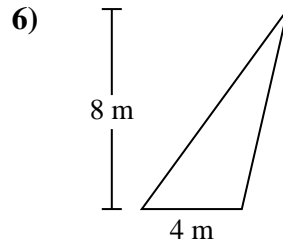
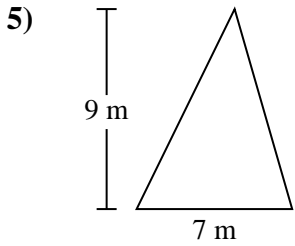
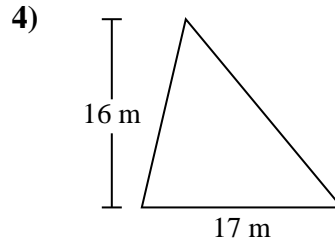
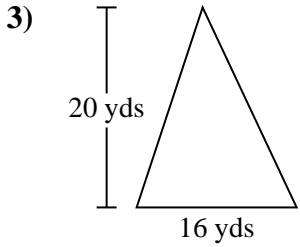
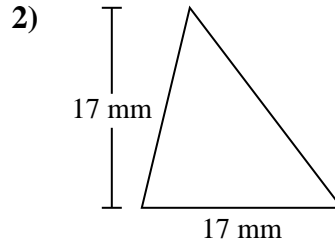
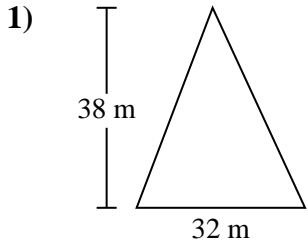




Berechne die Fläche jedes Dreiecks. Die Einheiten sind nicht maßstäblich.

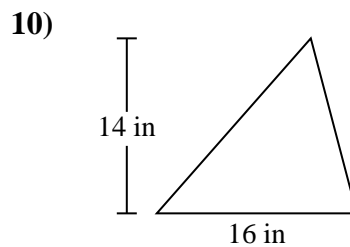
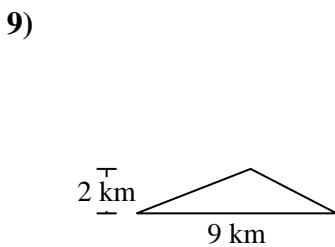
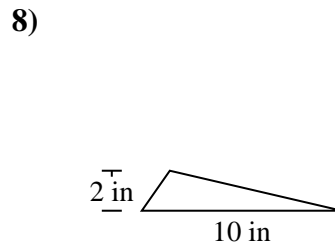
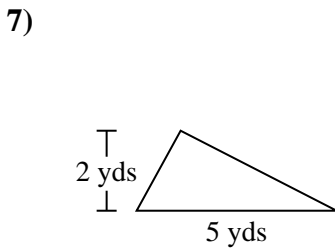
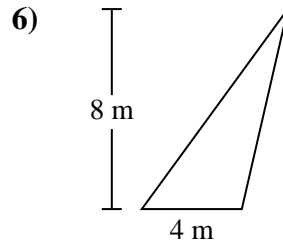
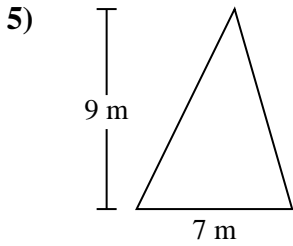
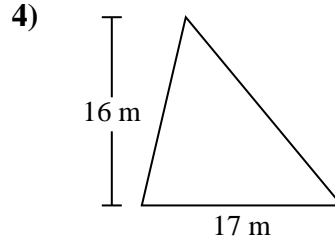
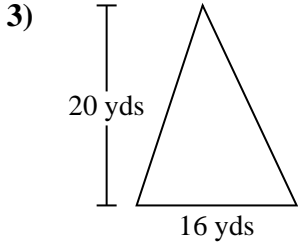
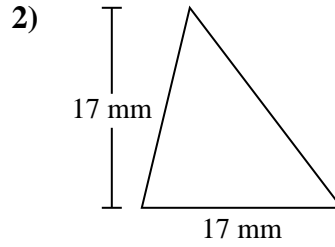
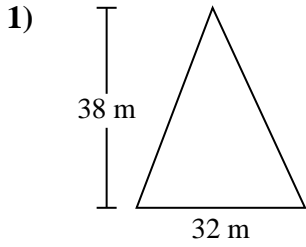
Antworten



1. _____
2. _____
3. _____
4. _____
5. _____
6. _____
7. _____
8. _____
9. _____
10. _____



Berechne die Fläche jedes Dreiecks. Die Einheiten sind nicht maßstäblich.



Antworten

1. 608 m²
2. 144,5 mm²
3. 160 yds²
4. 136 m²
5. 31,5 m²
6. 16 m²
7. 5 yds²
8. 10 in²
9. 9 km²
10. 112 in²



Berechne die Fläche jedes Dreiecks. Die Einheiten sind nicht maßstäblich.

10 in^2	$31,5 \text{ m}^2$	5 yds^2	9 km^2
160 yds^2	112 in^2	$144,5 \text{ mm}^2$	16 m^2
136 m^2	608 m^2		

Antworten

1. _____
2. _____
3. _____
4. _____
5. _____
6. _____
7. _____
8. _____
9. _____
10. _____

